



7

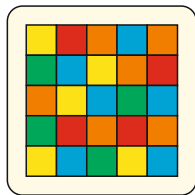
Aus welchen Teilen ist das Quadrat zusammengesetzt?




1



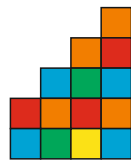
2




\_\_\_ und \_\_\_




6




5



3



4




8


www.mathemonsterchen.de

8

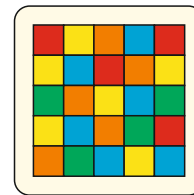
Aus welchen Teilen ist das Quadrat zusammengesetzt?



1




2




\_\_\_ und \_\_\_




6



5




3



4



8




7


www.mathemonsterchen.de

9

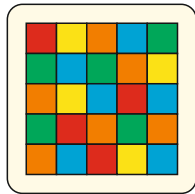
Aus welchen Teilen ist das Quadrat zusammengesetzt?



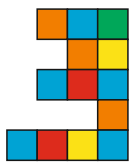
1




2




\_\_\_ und \_\_\_




6




5



3



4




8


www.mathemonsterchen.de

10

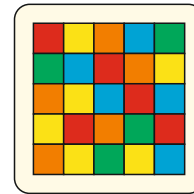
Aus welchen Teilen ist das Quadrat zusammengesetzt?



1



2




\_\_\_ und \_\_\_




6



5



3



4



8



7

www.mathemonsterchen.de