



3

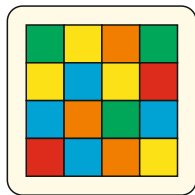
Aus welchen Teilen ist das Quadrat zusammengesetzt?



1




2




___ und ___




6




5




3



4




8




7

4


Aus welchen Teilen ist das Quadrat zusammengesetzt?



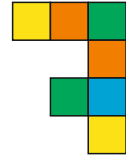
1



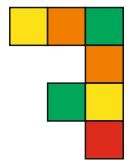
2




___ und ___



5




6



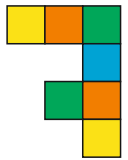
3



4




8




7

5

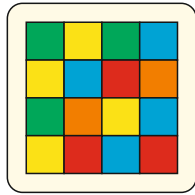
Aus welchen Teilen ist das Quadrat zusammengesetzt?




1




2




___ und ___




5




6




3



4



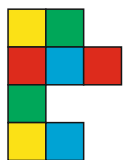
8




7

6


Aus welchen Teilen ist das Quadrat zusammengesetzt?



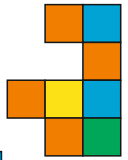
1




2




___ und ___



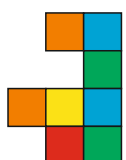
5



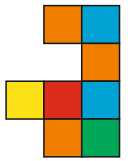
3



4



8



7